



LIFE·PAC®

Math



Alpha Omega Publications®

MATHEMATICS 105

Contents

I. Columnar Addition	2
II. Number Order, Place Value, Even and Odd, Greater Than, Less Than ...	9
III. Fractions, Clocks	17
IV. Ordinal Numbers, Charts	25
V. Number Line, Estimation, Patterns	30

Author:

Carol Bauler, B.A.

Editor:

Alan Christopherson, M.S.

Graphic Design:

JoAnn Cumming, A.A.



Alpha Omega Publications®

804 N. 2nd Ave. E., Rock Rapids, IA 51246-1759

© MCMXCVII by Alpha Omega Publications, Inc. All rights reserved. LIFEPAK, Doc Dickory, Dewey Decimole, Revver, Rikki, and Vicky Dickory are registered trademarks or trademarks of Alpha Omega Publications, Inc. pending registration in the United States Patent and Trademark Office. All rights reserved.

All trademarks and/or service marks referenced in this material are the property of their respective owners. Alpha Omega Publications, Inc. makes no claim of ownership to any trademarks and/or service marks other than their own and their affiliates', and makes no claim of affiliation to any companies whose trademarks may be listed in this material, other than their own.



Meet our friends.
There's Doc and Revver,
and Vicky, too.

They'll guide
you through the LIFEPAcs,
and keep the scores
for you.



Doc




Revver



Vicky

FUN WITH NUMBERS



My name is



Memory Verse

"Thy word is a lamp unto my feet, and a light unto my path."

Psalm 119:105

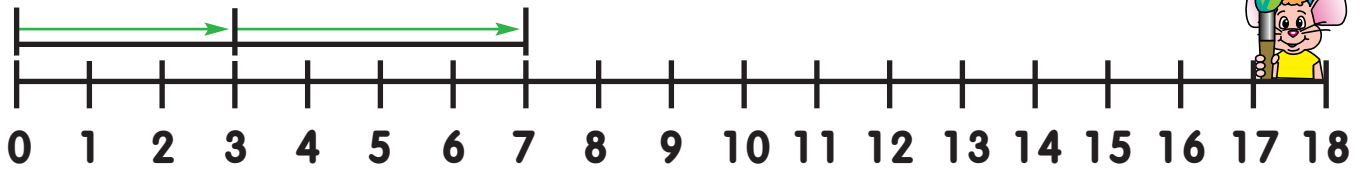


Objectives

1. I can add three numbers in columns.
2. I can write fractions for $\frac{1}{2}$ and $\frac{1}{4}$.
3. I can tell time to the half-hour.
4. I can say ordinal numbers.
5. I can make a chart.
6. I can estimate an answer.

I. Part One

$$3 + 4 = 7$$



Write the number in the .

$$\begin{array}{r} 9 \\ + 1 \\ \hline \end{array}$$

$$\begin{array}{r} 6 \\ + 6 \\ \hline \end{array}$$

$$\begin{array}{r} 4 \\ + 7 \\ \hline \end{array}$$

$$\begin{array}{r} 8 \\ + 2 \\ \hline \end{array}$$

$$\begin{array}{r} 9 \\ + 2 \\ \hline \end{array}$$

$$\begin{array}{r} 8 \\ + 4 \\ \hline \end{array}$$

$$\begin{array}{r} 3 \\ + 8 \\ \hline \end{array}$$

$$\begin{array}{r} 6 \\ + 4 \\ \hline \end{array}$$

$$\begin{array}{r} 4 \\ + 8 \\ \hline \end{array}$$

$$\begin{array}{r} 3 \\ + 7 \\ \hline \end{array}$$

$$\begin{array}{r} 9 \\ + 3 \\ \hline \end{array}$$

$$\begin{array}{r} 6 \\ + 6 \\ \hline \end{array}$$

$$\begin{array}{r} 7 \\ + 5 \\ \hline \end{array}$$

$$\begin{array}{r} 8 \\ + 3 \\ \hline \end{array}$$

$$\begin{array}{r} 5 \\ + 5 \\ \hline \end{array}$$

$$\begin{array}{r} 3 \\ + 9 \\ \hline \end{array}$$

$$\begin{array}{r} 7 \\ + 3 \\ \hline \end{array}$$

$$\begin{array}{r} 5 \\ + 6 \\ \hline \end{array}$$

$$\begin{array}{r} 8 \\ + 4 \\ \hline \end{array}$$

$$\begin{array}{r} 2 \\ + 9 \\ \hline \end{array}$$

$$\begin{array}{r} 4 \\ + 6 \\ \hline \end{array}$$

$$\begin{array}{r} 6 \\ + 5 \\ \hline \end{array}$$

$$\begin{array}{r} 1 \\ + 9 \\ \hline \end{array}$$

$$\begin{array}{r} 7 \\ + 4 \\ \hline \end{array}$$

$$\begin{array}{r} 3 \\ + 7 \\ \hline \end{array}$$

$$\begin{array}{r} 7 \\ + 5 \\ \hline \end{array}$$

$$\begin{array}{r} 9 \\ + 2 \\ \hline \end{array}$$

$$\begin{array}{r} 5 \\ + 5 \\ \hline \end{array}$$

$$\begin{array}{r} 3 \\ + 8 \\ \hline \end{array}$$

$$\begin{array}{r} 9 \\ + 3 \\ \hline \end{array}$$



Write the number in the .

$$\begin{array}{r} 8 \\ + 6 \\ \hline \hline \end{array}$$

$$\begin{array}{r} 7 \\ + 7 \\ \hline \hline \end{array}$$

$$\begin{array}{r} 6 \\ + 9 \\ \hline \hline \end{array}$$

$$\begin{array}{r} 5 \\ + 9 \\ \hline \hline \end{array}$$

$$\begin{array}{r} 9 \\ + 4 \\ \hline \hline \end{array}$$

$$\begin{array}{r} 7 \\ + 9 \\ \hline \hline \end{array}$$

$$\begin{array}{r} 4 \\ + 9 \\ \hline \hline \end{array}$$

$$\begin{array}{r} 8 \\ + 5 \\ \hline \hline \end{array}$$

$$\begin{array}{r} 9 \\ + 6 \\ \hline \hline \end{array}$$

$$\begin{array}{r} 8 \\ + 7 \\ \hline \hline \end{array}$$

$$\begin{array}{r} 7 \\ + 6 \\ \hline \hline \end{array}$$

$$\begin{array}{r} 9 \\ + 8 \\ \hline \hline \end{array}$$

$$\begin{array}{r} 9 \\ + 9 \\ \hline \hline \end{array}$$

$$\begin{array}{r} 6 \\ + 7 \\ \hline \hline \end{array}$$

$$\begin{array}{r} 8 \\ + 8 \\ \hline \hline \end{array}$$

$$\begin{array}{r} 9 \\ + 7 \\ \hline \hline \end{array}$$

$$\begin{array}{r} 8 \\ + 9 \\ \hline \hline \end{array}$$

$$\begin{array}{r} 7 \\ + 7 \\ \hline \hline \end{array}$$

$$\begin{array}{r} 7 \\ + 8 \\ \hline \hline \end{array}$$

$$\begin{array}{r} 9 \\ + 5 \\ \hline \hline \end{array}$$

$$\begin{array}{r} 6 \\ + 8 \\ \hline \hline \end{array}$$

$$\begin{array}{r} 4 \\ + 9 \\ \hline \hline \end{array}$$

$$\begin{array}{r} 5 \\ + 8 \\ \hline \hline \end{array}$$

$$\begin{array}{r} 8 \\ + 9 \\ \hline \hline \end{array}$$

$$\begin{array}{r} 9 \\ + 4 \\ \hline \hline \end{array}$$

$$\begin{array}{r} 6 \\ + 9 \\ \hline \hline \end{array}$$

$$\begin{array}{r} 7 \\ + 6 \\ \hline \hline \end{array}$$

$$\begin{array}{r} 8 \\ + 8 \\ \hline \hline \end{array}$$

$$\begin{array}{r} 9 \\ + 6 \\ \hline \hline \end{array}$$

$$\begin{array}{r} 8 \\ + 5 \\ \hline \hline \end{array}$$

$$\begin{array}{r} 9 \\ + 9 \\ \hline \hline \end{array}$$

$$\begin{array}{r} 7 \\ + 8 \\ \hline \hline \end{array}$$

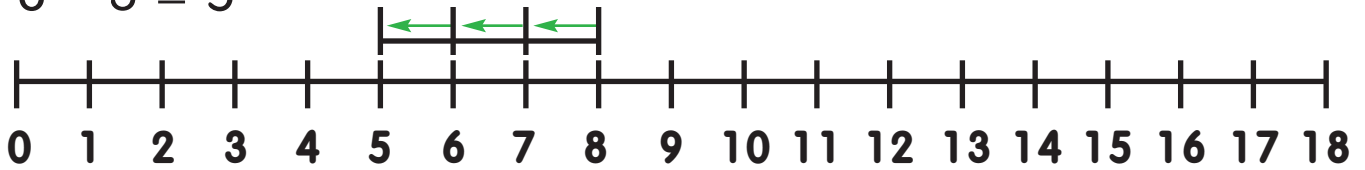
$$\begin{array}{r} 6 \\ + 7 \\ \hline \hline \end{array}$$

$$\begin{array}{r} 5 \\ + 9 \\ \hline \hline \end{array}$$

$$\begin{array}{r} 6 \\ + 8 \\ \hline \hline \end{array}$$

$$\begin{array}{r} 7 \\ + 9 \\ \hline \hline \end{array}$$

$$8 - 3 = 5$$



Write the number in the .

$$\begin{array}{r} 8 \\ - 7 \\ \hline \square \end{array}$$

$$\begin{array}{r} 5 \\ - 2 \\ \hline \square \end{array}$$

$$\begin{array}{r} 8 \\ - 3 \\ \hline \square \end{array}$$

$$\begin{array}{r} 6 \\ - 4 \\ \hline \square \end{array}$$

$$\begin{array}{r} 7 \\ - 2 \\ \hline \square \end{array}$$

$$\begin{array}{r} 9 \\ - 6 \\ \hline \square \end{array}$$

$$\begin{array}{r} 9 \\ - 9 \\ \hline \square \end{array}$$

$$\begin{array}{r} 9 \\ - 7 \\ \hline \square \end{array}$$

$$\begin{array}{r} 4 \\ - 3 \\ \hline \square \end{array}$$

$$\begin{array}{r} 4 \\ - 2 \\ \hline \square \end{array}$$

$$\begin{array}{r} 7 \\ - 4 \\ \hline \square \end{array}$$

$$\begin{array}{r} 9 \\ - 1 \\ \hline \square \end{array}$$

$$\begin{array}{r} 6 \\ - 1 \\ \hline \square \end{array}$$

$$\begin{array}{r} 7 \\ - 3 \\ \hline \square \end{array}$$

$$\begin{array}{r} 2 \\ - 1 \\ \hline \square \end{array}$$

$$\begin{array}{r} 4 \\ - 1 \\ \hline \square \end{array}$$

$$\begin{array}{r} 6 \\ - 3 \\ \hline \square \end{array}$$

$$\begin{array}{r} 8 \\ - 2 \\ \hline \square \end{array}$$

$$\begin{array}{r} 7 \\ - 0 \\ \hline \square \end{array}$$

$$\begin{array}{r} 3 \\ - 2 \\ \hline \square \end{array}$$

$$\begin{array}{r} 5 \\ - 5 \\ \hline \square \end{array}$$

$$\begin{array}{r} 1 \\ - 1 \\ \hline \square \end{array}$$

$$\begin{array}{r} 7 \\ - 6 \\ \hline \square \end{array}$$

$$\begin{array}{r} 9 \\ - 5 \\ \hline \square \end{array}$$