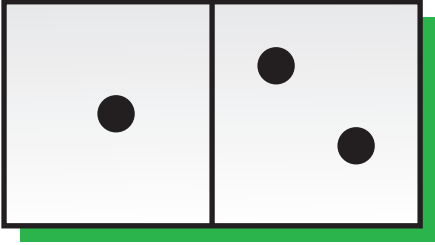

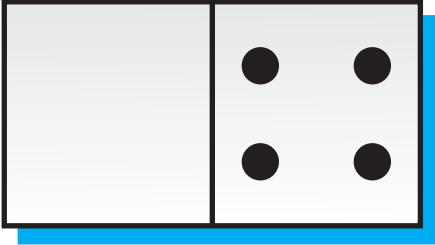


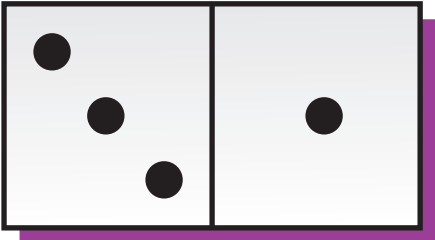
Name \_\_\_\_\_

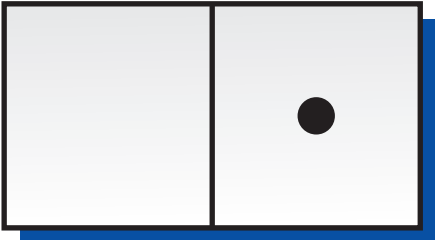
Read the dot cards.

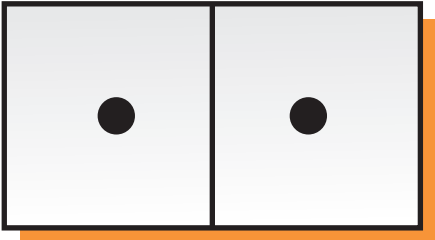
1. 

2. 

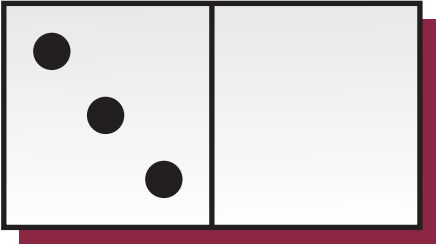
3. 

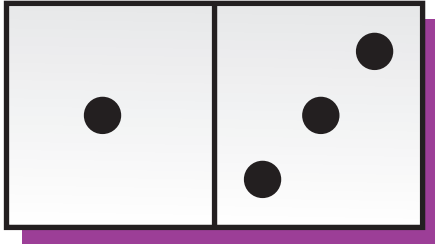
4. 


5. 

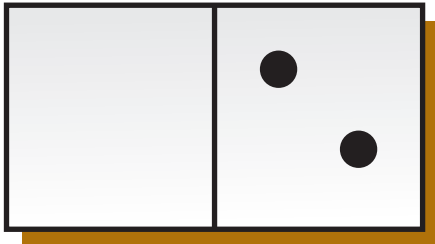
6. 

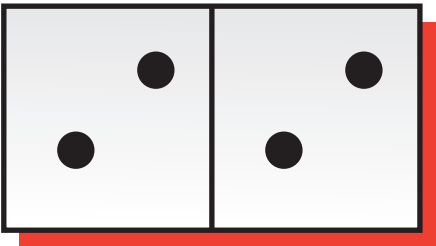
Write the numbers.

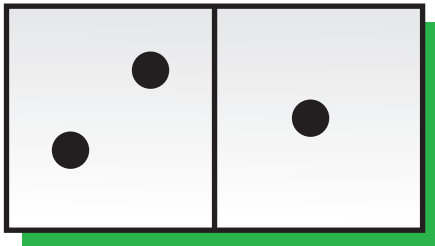
7.   
 \_\_\_\_\_ plus \_\_\_\_\_ equals \_\_\_\_\_.

8.   
 \_\_\_\_\_ plus \_\_\_\_\_ equals \_\_\_\_\_.

9.   
 \_\_\_\_\_ plus \_\_\_\_\_ equals \_\_\_\_\_.

10.   
 \_\_\_\_\_ plus \_\_\_\_\_ equals \_\_\_\_\_.

11.   
 \_\_\_\_\_ plus \_\_\_\_\_ equals \_\_\_\_\_.

12.   
 \_\_\_\_\_ plus \_\_\_\_\_ equals \_\_\_\_\_.

Show the number 4 in different ways.

13.

--

Draw dots. Then complete the addition sentence.

14.

--	--

3 plus 1 equals 4.

    +     =    

15.

--	--

2 plus 2 equals 4.

    +     =    

16.

--	--

0 plus 4 equals 4.

    +     =    



17. Kayla found 3 eggs in a nest.  
Reagan found 1 egg in a nest.  
How many eggs were in the two nests? Draw a picture with dots.

--	--

Write the addition sentence.

    +     =     eggs