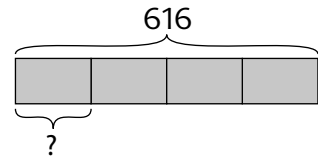
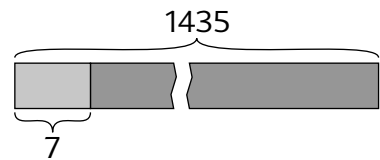


Find the missing numbers.

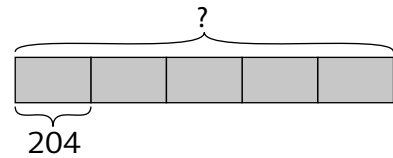
2. (a)  $4 \times \underline{\hspace{2cm}} = 616$



(b)  $\underline{\hspace{2cm}} \times 7 = 1435$



(c)  $\underline{\hspace{2cm}} \div 5 = 204$



(d)  $333 \div \underline{\hspace{2cm}} = 9$

