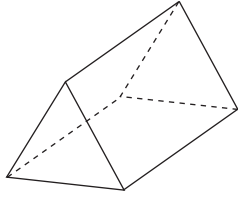
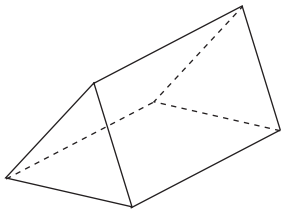


(f)



\_\_\_\_\_

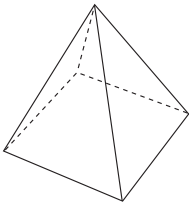
2. Fill in the blanks.



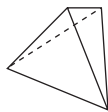
A triangular prism has \_\_\_\_\_ rectangular faces and \_\_\_\_\_ edges.

3. Refer the following figures to help you fill in the blanks.

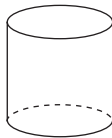
square pyramid



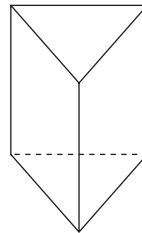
triangular pyramid



cylinder



triangular prism



(a) A \_\_\_\_\_ has a curved surface.

(b) A \_\_\_\_\_ and a \_\_\_\_\_ have five flat faces.

(c) A triangular pyramid has \_\_\_\_\_ vertices.