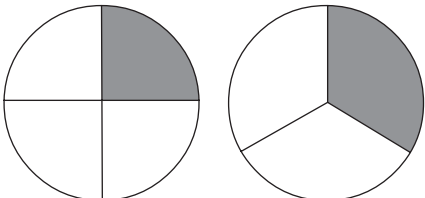
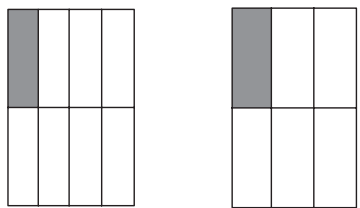
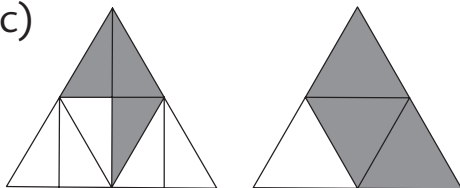
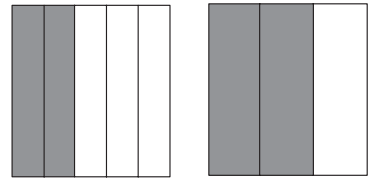
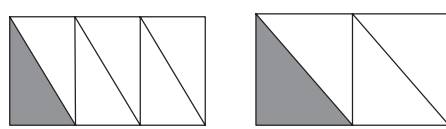
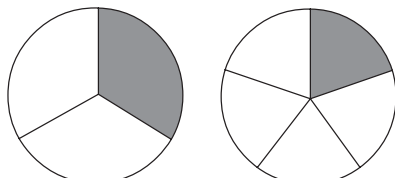
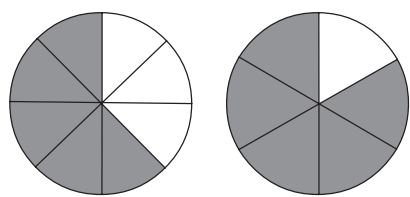
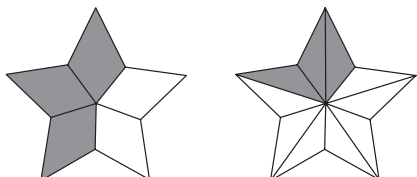


# EXERCISE 2

1. Circle the greater fraction.

<p>(a)</p>  <p><math>\frac{1}{4}</math>      <math>\frac{1}{3}</math></p>	<p>(b)</p>  <p><math>\frac{1}{8}</math>      <math>\frac{1}{6}</math></p>
<p>(c)</p>  <p><math>\frac{3}{8}</math>      <math>\frac{3}{4}</math></p>	<p>(d)</p>  <p><math>\frac{2}{5}</math>      <math>\frac{2}{3}</math></p>

2. Circle the smaller fraction.

<p>(a)</p>  <p><math>\frac{1}{6}</math>      <math>\frac{1}{4}</math></p>	<p>(b)</p>  <p><math>\frac{1}{3}</math>      <math>\frac{1}{5}</math></p>
<p>(c)</p>  <p><math>\frac{5}{8}</math>      <math>\frac{5}{6}</math></p>	<p>(d)</p>  <p><math>\frac{3}{5}</math>      <math>\frac{3}{10}</math></p>