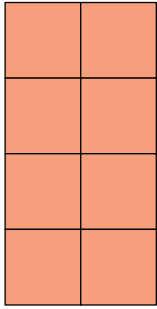



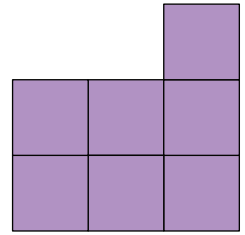
4. These figures are made up of 1-cm squares.



**A**



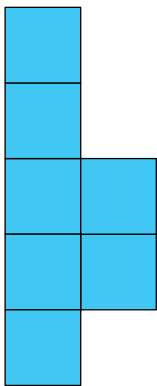
**B**




**C**

- (a) Do they have the same area?
- (b) Do they have the same perimeter?

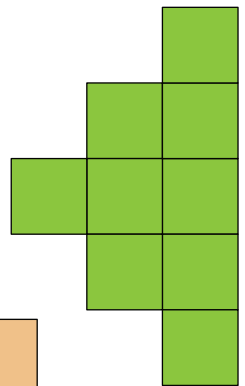
5. These figures are made up of 1-cm squares.



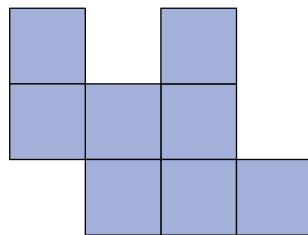
**P**



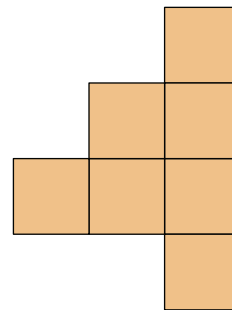
**Q**



**R**



**S**



**T**

- (a) Which two figures have the same area but different perimeters?
- (b) Which two figures have the same perimeter but different areas?
- (c) Which two figures have the same area and perimeter?