




2. The diagram shows the prices of yogurt sold in tubs of different sizes.

small	medium	large
 <i>Yogurt</i> 1 pint	 <i>Yogurt</i> 2 pints	 <i>Yogurt</i> 3 pints
\$3.90	\$5.15	\$6.70

Complete the following table to show the given data.

Size of tub	Amount of yogurt	Price
Small		
Medium		
Large		

- (a) Mrs. Smith bought 2 small tubs of yogurt.  
How much did she spend? \_\_\_\_\_
- (b) How much cheaper is it to buy 1 large tub  
of yogurt than to buy 2 small tubs? \_\_\_\_\_
- (c) Mrs. Gray bought a large tub and two  
medium-sized tubs of yogurt.  
How much did she spend? \_\_\_\_\_