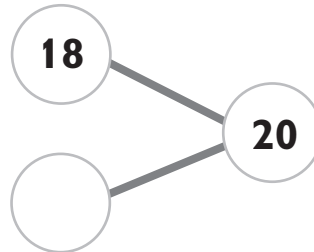


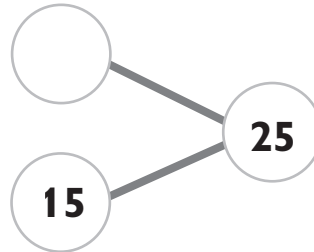
**Test  
A****Unit 2: Addition and Subtraction****Chapter 1: Meanings of Addition and Subtraction**

1. Fill in the blanks.

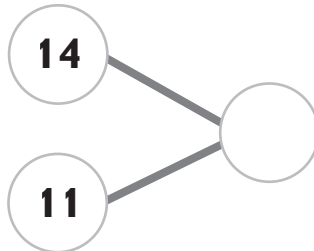
(a)  $20 - 18 =$  \_\_\_\_\_



(b)  $25 - 15 =$  \_\_\_\_\_



(c)  $14 + 11 =$  \_\_\_\_\_



(d)  $23 + 16 =$  \_\_\_\_\_

