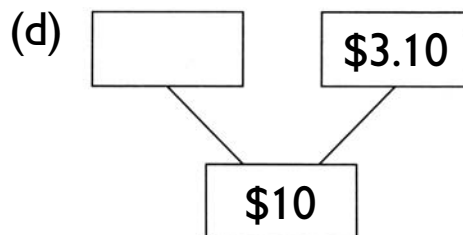
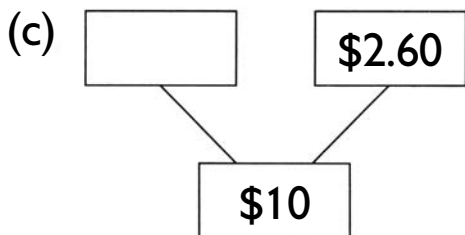
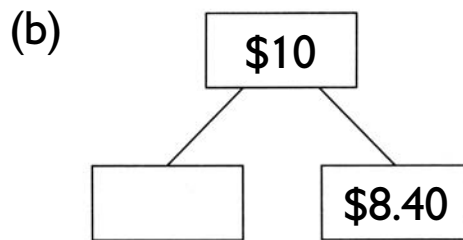
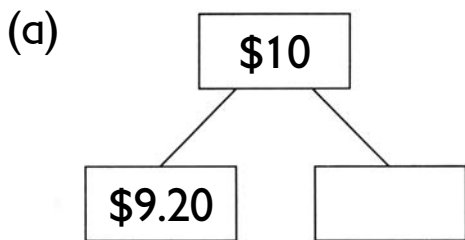


EXERCISE 5

1. How much money is needed to make \$10?



2. Write the missing numbers.

(a) $\$6.50 \xrightarrow{+ \boxed{} \text{¢}} \$7 \xrightarrow{+ \$ \boxed{}} \10

$\$6.50 + \$ \boxed{} = \10

(b) $\$2.15 \xrightarrow{+ \boxed{} \text{¢}} \$3 \xrightarrow{+ \$ \boxed{}} \10

$\$2.15 + \$ \boxed{} = \10

(c) $\$4.70 + \$ \boxed{} = \10