





3. (a) Multiply 7 by 3.



$$7 \times 3 = \square$$

(b) Multiply 9 by 4.



$$9 \times 4 = \square$$

Exercise 2, pages 94-95

4. (a)



$$4 \times 2 = \square$$



$$2 \times 4 = \square$$

(b)



$$5 \times 3 = \square$$



$$3 \times 5 = \square$$



Exercise 3, pages 96-97