







$$5 + 5 + 5 = \square$$

$$3 \text{ fives} = \square$$



There are 5 pears in each group.



$$4 + 4 + 4 + 4 + 4 + 4 = \square$$

$$6 \text{ fours} = \square$$

There are 4 oranges in each group.



$$6 + 6 = \square$$

$$2 \text{ sixes} = \square$$

There are 6 pineapples in each group.

