




5. Complete the addition sentences.




$$1 + \square = 10$$



$$2 + \square = 10$$



$$3 + \square = 10$$



$$4 + \square = 10$$

(e)  $5 + \square = 10$

(f)  $6 + \square = 10$

(g)  $7 + \square = 10$

(h)  $8 + \square = 10$

(i)  $9 + \square = 10$

(j)  $10 + \square = 10$