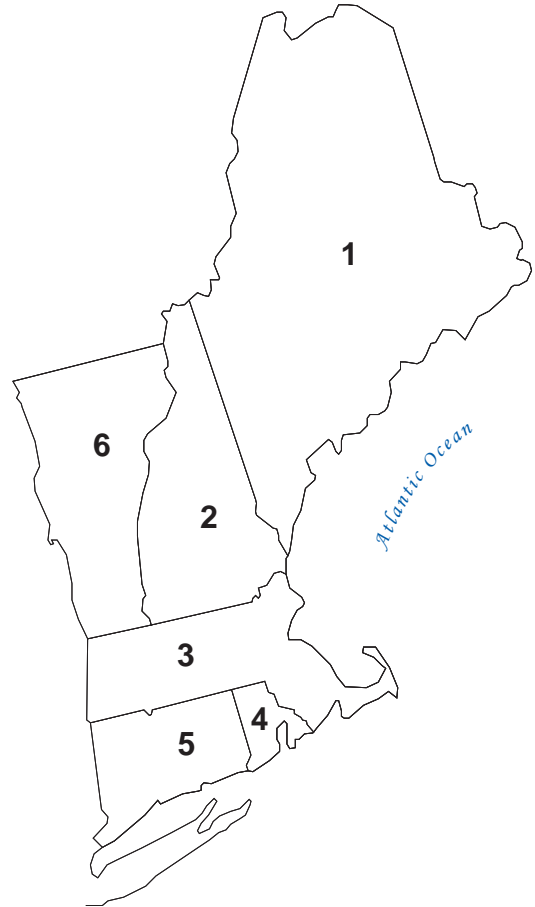


# SECTION I

Use the numbers to correctly identify the states on the map.

## NEW ENGLAND

1. Maine
2. New Hampshire
3. Massachusetts
4. Rhode Island
5. Connecticut
6. Vermont



## MID-ATLANTIC

1. New York
2. New Jersey
3. Delaware
4. Maryland
5. Pennsylvania
6. West Virginia



## SECTION II

For each region, match the capital to its state.

### NEW ENGLAND

- |                        |               |
|------------------------|---------------|
| <u>5</u> Maine         | 1. Providence |
| <u>3</u> New Hampshire | 2. Montpelier |
| <u>4</u> Massachusetts | 3. Concord    |
| <u>1</u> Rhode Island  | 4. Boston     |
| <u>6</u> Connecticut   | 5. Augusta    |
| <u>2</u> Vermont       | 6. Hartford   |

### MIDDLE ATLANTIC

- |                        |               |
|------------------------|---------------|
| <u>6</u> New York      | 1. Harrisburg |
| <u>5</u> New Jersey    | 2. Dover      |
| <u>2</u> Delaware      | 3. Annapolis  |
| <u>3</u> Maryland      | 4. Charleston |
| <u>1</u> Pennsylvania  | 5. Trenton    |
| <u>4</u> West Virginia | 6. Albany     |

### GREAT LAKES

- |                    |                 |
|--------------------|-----------------|
| <u>4</u> Wisconsin | 1. Springfield  |
| <u>1</u> Illinois  | 2. Lansing      |
| <u>5</u> Indiana   | 3. Columbus     |
| <u>2</u> Michigan  | 4. Madison      |
| <u>3</u> Ohio      | 5. Indianapolis |

### SOUTHWESTERN

- |                     |                  |
|---------------------|------------------|
| <u>3</u> Arizona    | 1. Austin        |
| <u>4</u> New Mexico | 2. Oklahoma City |
| <u>2</u> Oklahoma   | 3. Phoenix       |
| <u>1</u> Texas      | 4. Santa Fe      |

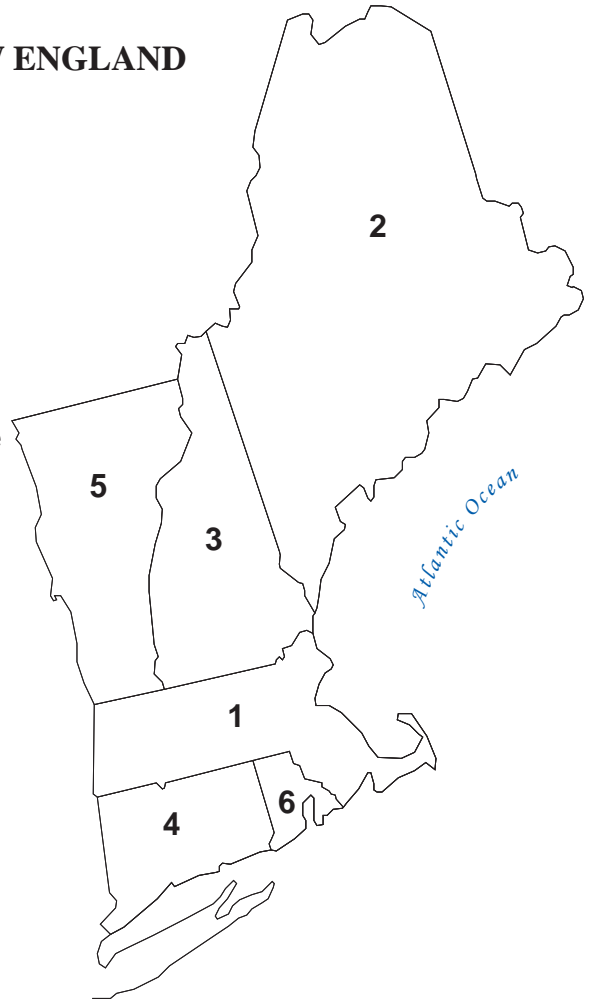
# SECTION III

Provide the name of the state based on its capital,  
then use the numbers to label the blank map.

Pay attention to spelling.

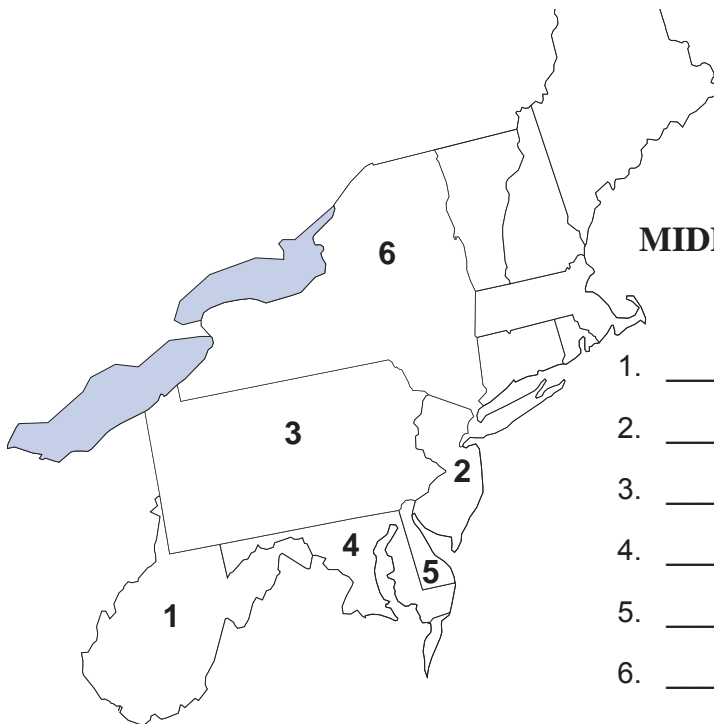
## NEW ENGLAND

1. \_\_\_\_\_ Massachusetts \_\_\_\_\_ Boston
2. \_\_\_\_\_ Maine \_\_\_\_\_ Augusta
3. \_\_\_\_\_ New Hampshire \_\_\_\_\_ Concord
4. \_\_\_\_\_ Connecticut \_\_\_\_\_ Hartford
5. \_\_\_\_\_ Vermont \_\_\_\_\_ Montpelier
6. \_\_\_\_\_ Rhode Island \_\_\_\_\_ Providence



## MIDDLE ATLANTIC

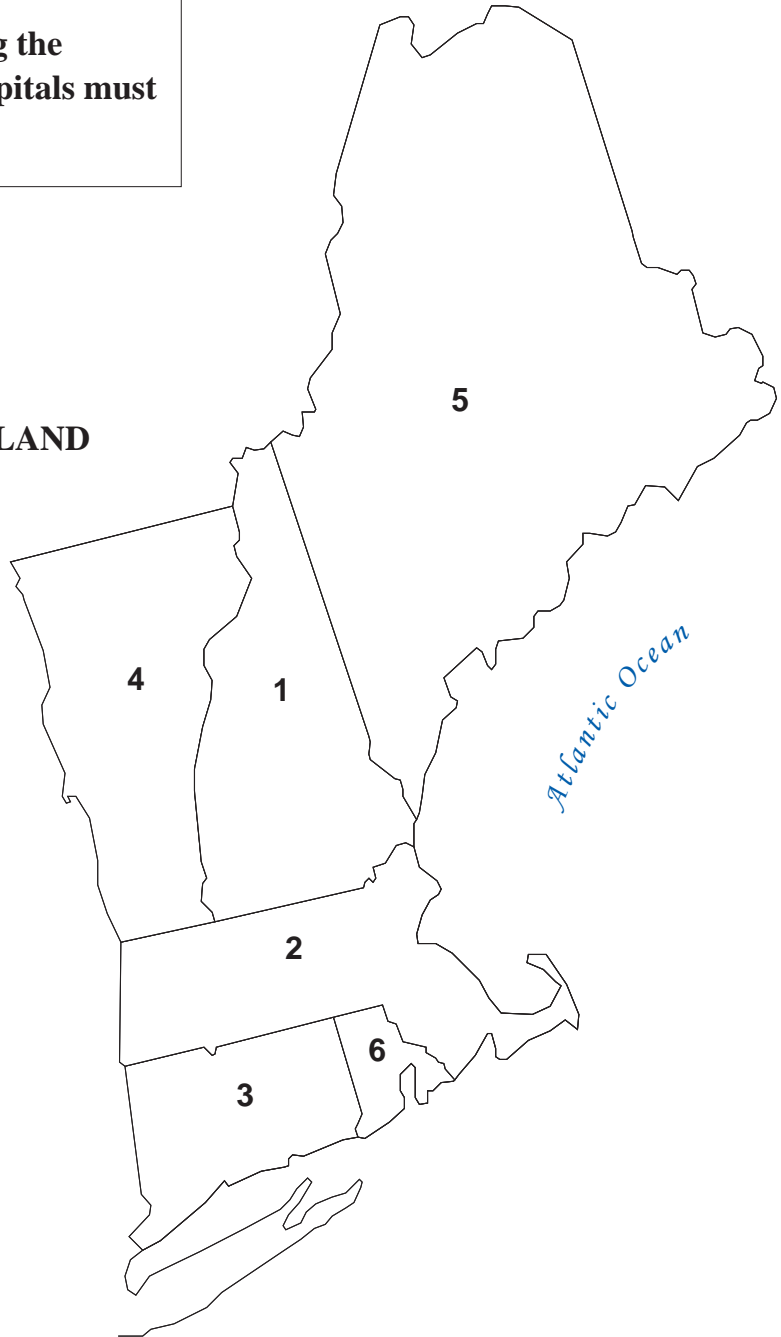
1. \_\_\_\_\_ West Virginia \_\_\_\_\_ Charleston
2. \_\_\_\_\_ New Jersey \_\_\_\_\_ Trenton
3. \_\_\_\_\_ Pennsylvania \_\_\_\_\_ Harrisburg
4. \_\_\_\_\_ Maryland \_\_\_\_\_ Annapolis
5. \_\_\_\_\_ Delaware \_\_\_\_\_ Dover
6. \_\_\_\_\_ New York \_\_\_\_\_ Albany



## SECTION IV

Identify each state and its capital using the numbers on the map. All states and capitals must be spelled correctly.

NEW ENGLAND



- |                                |                            |
|--------------------------------|----------------------------|
| 1. State: <u>New Hampshire</u> | Capital: <u>Concord</u>    |
| 2. State: <u>Massachusetts</u> | Capital: <u>Boston</u>     |
| 3. State: <u>Connecticut</u>   | Capital: <u>Hartford</u>   |
| 4. State: <u>Vermont</u>       | Capital: <u>Montpelier</u> |
| 5. State: <u>Maine</u>         | Capital: <u>Augusta</u>    |
| 6. State: <u>Rhode Island</u>  | Capital: <u>Providence</u> |