

SECTION I

Use the numbers to correctly identify the states on the map.

NEW ENGLAND

1. Maine
2. New Hampshire
3. Massachusetts
4. Rhode Island
5. Connecticut
6. Vermont



MID-ATLANTIC

1. New York
2. New Jersey
3. Delaware
4. Maryland
5. Pennsylvania
6. West Virginia



SECTION II

For each region, match the capital to its state.

NEW ENGLAND

- | | |
|-------------------|---------------|
| ___ Maine | 1. Providence |
| ___ New Hampshire | 2. Montpelier |
| ___ Massachusetts | 3. Concord |
| ___ Rhode Island | 4. Boston |
| ___ Connecticut | 5. Augusta |
| ___ Vermont | 6. Hartford |

MIDDLE ATLANTIC

- | | |
|-------------------|---------------|
| ___ New York | 1. Harrisburg |
| ___ New Jersey | 2. Dover |
| ___ Delaware | 3. Annapolis |
| ___ Maryland | 4. Charleston |
| ___ Pennsylvania | 5. Trenton |
| ___ West Virginia | 6. Albany |

GREAT LAKES

- | | |
|---------------|-----------------|
| ___ Wisconsin | 1. Springfield |
| ___ Illinois | 2. Lansing |
| ___ Indiana | 3. Columbus |
| ___ Michigan | 4. Madison |
| ___ Ohio | 5. Indianapolis |

SOUTHWESTERN

- | | |
|----------------|------------------|
| ___ Arizona | 1. Austin |
| ___ New Mexico | 2. Oklahoma City |
| ___ Oklahoma | 3. Phoenix |
| ___ Texas | 4. Santa Fe |

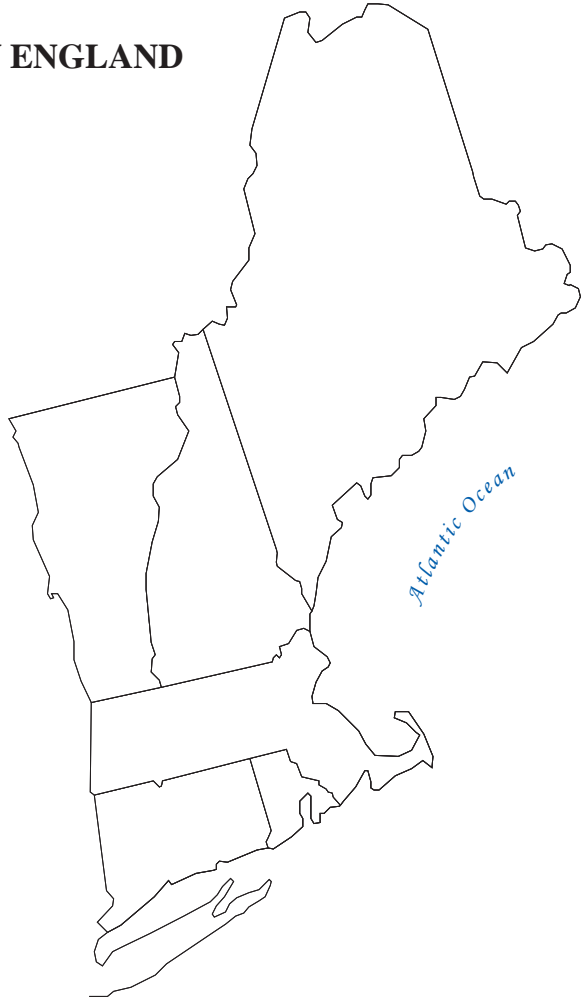
SECTION III

Provide the name of the state based on its capital,
then use the numbers to label the blank map.

Pay attention to spelling.

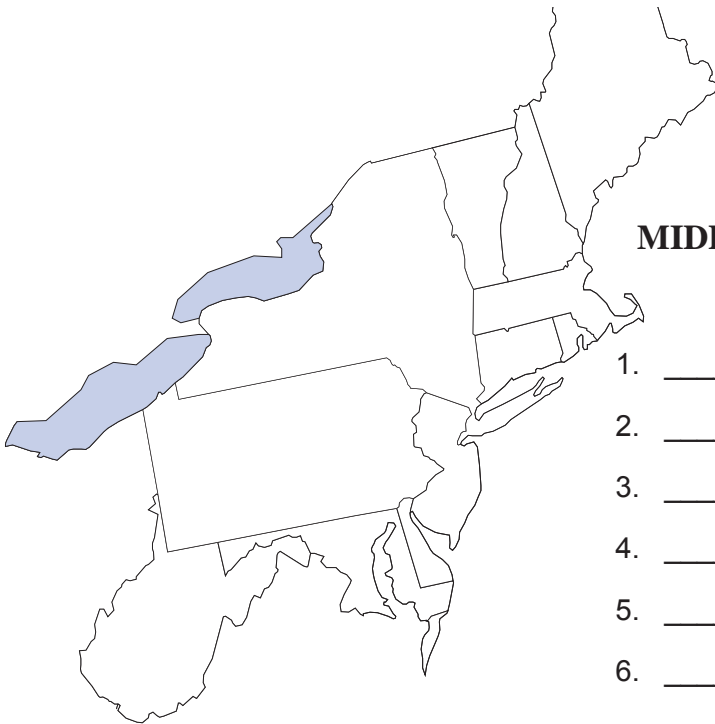
NEW ENGLAND

1. _____ Boston
2. _____ Augusta
3. _____ Concord
4. _____ Hartford
5. _____ Montpelier
6. _____ Providence



MIDDLE ATLANTIC

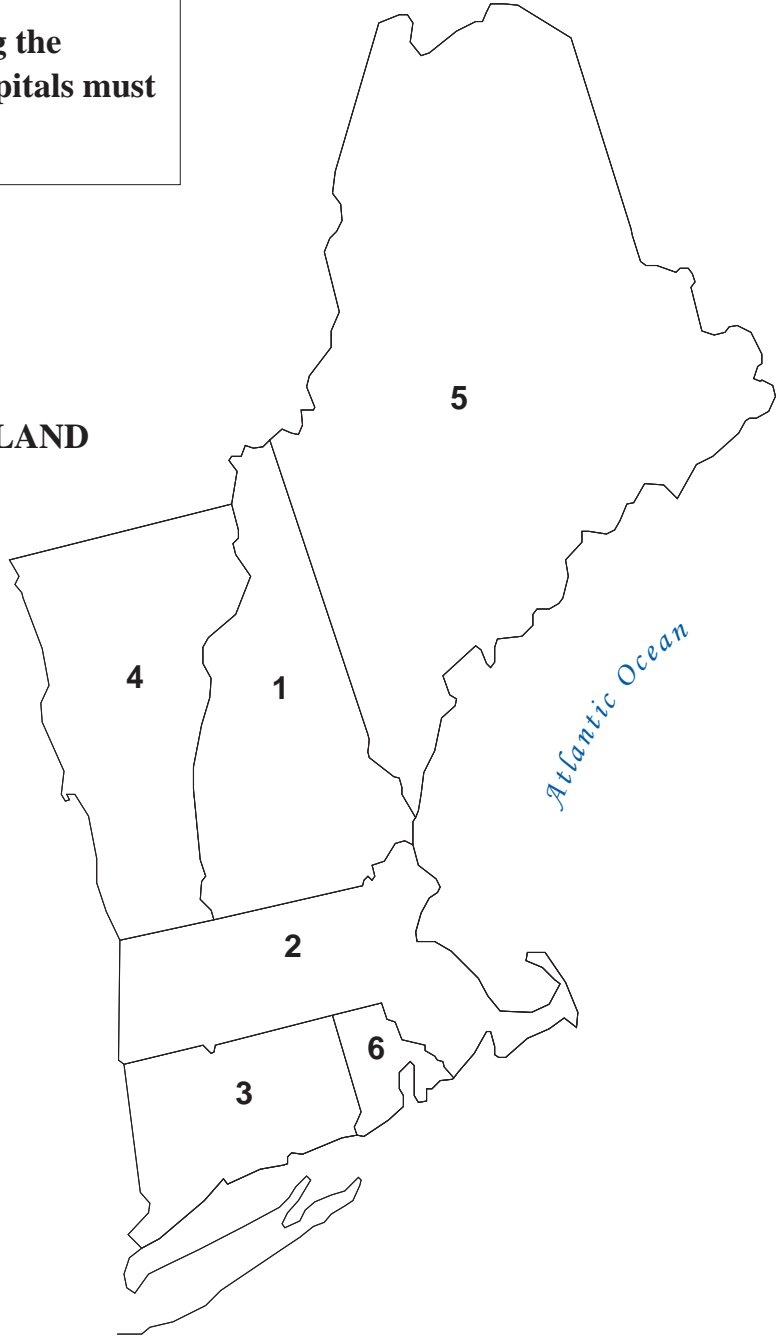
1. _____ Charleston
2. _____ Trenton
3. _____ Harrisburg
4. _____ Annapolis
5. _____ Dover
6. _____ Albany



SECTION IV

Identify each state and its capital using the numbers on the map. All states and capitals must be spelled correctly.

NEW ENGLAND



- | | |
|-----------------|----------------|
| 1. State: _____ | Capital: _____ |
| 2. State: _____ | Capital: _____ |
| 3. State: _____ | Capital: _____ |
| 4. State: _____ | Capital: _____ |
| 5. State: _____ | Capital: _____ |
| 6. State: _____ | Capital: _____ |