


Lesson One

Pictures and Captions

WHAT I WILL LEARN What can a picture show me?
How do **captions** help me?

Here is an **aerial photo**. It was made by taking a picture from an airplane.



CIRCLE IT

1. Circle the largest building in the picture.
2. Circle the bridge.
3. The bridge is _____ the largest building.

above **below**

4. Which is a water area?

1 **2** **3**

Look at these two pictures.

A



My Dragon by Chris Hent, Age 8

B



This raccoon is hungry.

The words below the pictures are called **captions**. They help you learn more about the pictures.

CIRCLE IT

5. Which picture shows something drawn by a child?

picture A **picture B**

6. What animal is shown in picture A?

dog **dragon** **horse**

7. What animal is in picture B?

squirrel **monkey** **raccoon**

8. What is the animal in picture B doing?

sleeping **eating** **running**

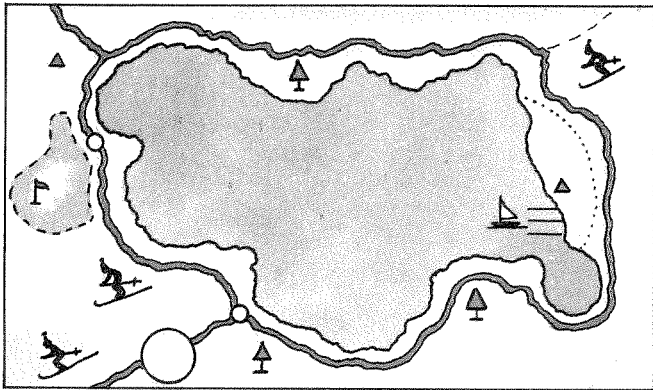
Lesson Two

What Is a Map?

WHAT I WILL LEARN What is a map?
How is a map made?

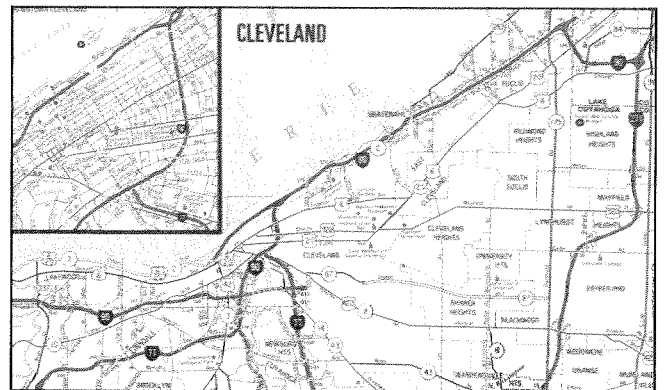
Look at these three maps.

A



Pure Lake

B



City of Cleveland

C



Satellite map of Earth

A map is a **model** of a real place. It shows a smaller picture of something that is too large to see all at once. Maps teach us about large places without our going there. Map A is a map of Pure Lake. Map B shows a large city.

Maps are made in several ways. Some maps are drawn after measuring the earth. Other maps are made by using facts about a certain place. Some maps are made from **aerial photos** of places on the earth. The newest maps are made by using satellites and computers. Map C on page 4 was made by a computer.

CIRCLE THE BEST ANSWER

1. Which map shows a city?

map A map B map C

2. Which map shows Pure Lake?

map A map B map C

3. A map is useful because it shows _____.

- a. a lot in a small space**
- b. things that don't change**
- c. how something will look later**

4. Some maps are drawn by using _____.

typewriters computers telephones

5. A map is a _____ of a real thing.

model idea book

6. A map of our earth would be _____ than the earth.

smaller larger

7. What does map C show?

Cleveland the earth Pure Lake