

# DRILLS & MAPPING

## Week 8 - Southern States

### 🌸 Day 1

What two bodies of water surround the Delmarva Peninsula of Virginia? \_\_\_\_\_

What is the highest point in Virginia, and where is it located? \_\_\_\_\_

### 🌸 Day 2

What national park is located at the border between North Carolina and Tennessee? \_\_\_\_\_

What is the name of the area of rolling land east of North Carolina's Blue Ridge Mountains? \_\_\_\_\_

### 🌸 Day 3

Name two large lakes southeast of the capital city of South Carolina. \_\_\_\_\_

What state is located southwest of South Carolina? \_\_\_\_\_

### 🌸 Day 4

What is the highest point in Georgia, and where is it located? \_\_\_\_\_

What river carries water from both the Oconee River and Ocmulgee River into the Atlantic Ocean at St. Simon's Island, GA? \_\_\_\_\_

## MAPPING

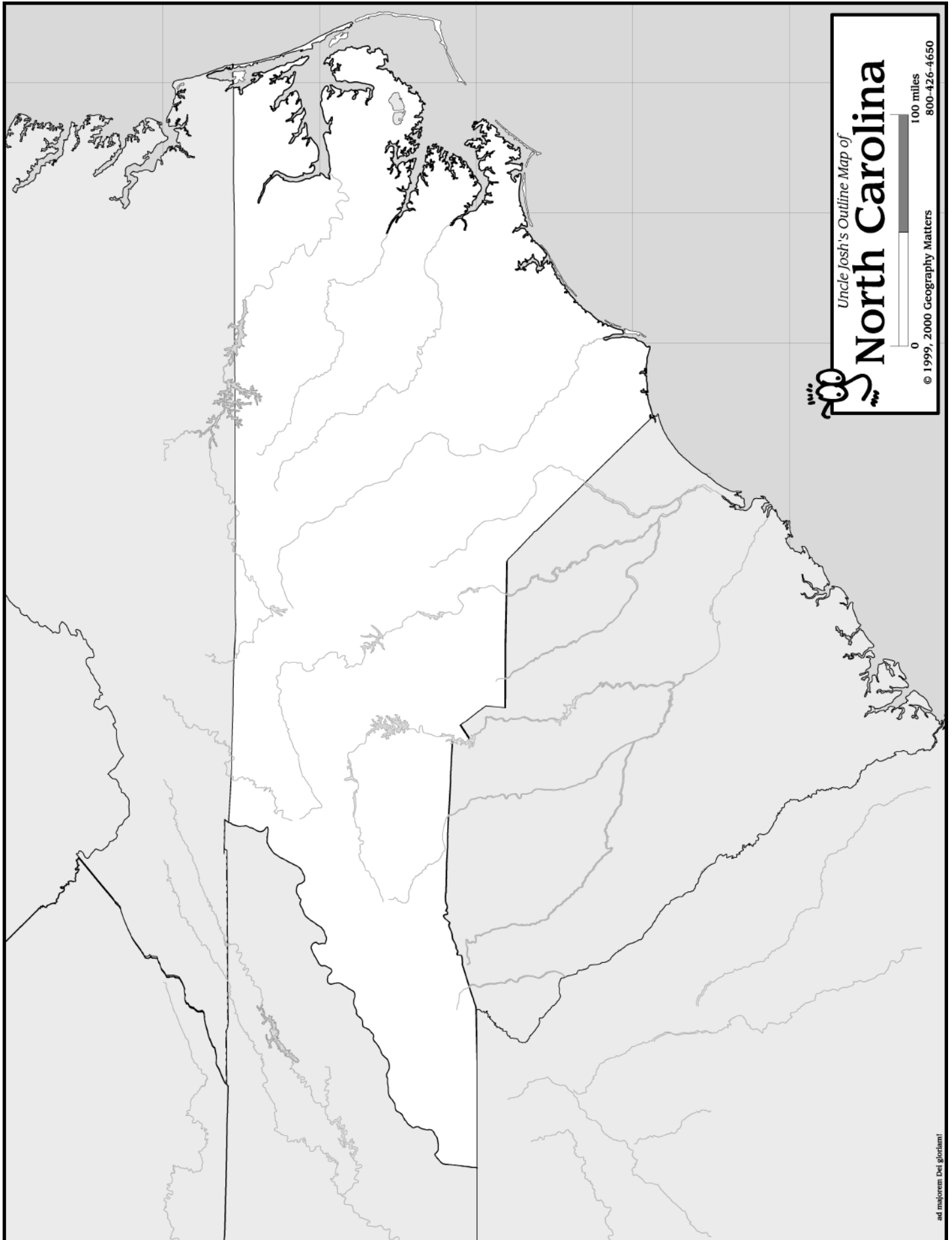
### North Carolina

- Shade and label the Blue Ridge Mountains and the Piedmont.
- Place a brown triangle at Mount Mitchell and label its name and elevation.
- Shade and label the following lakes: Lake Norman, High Rock Lake, and Kerr Lake.
- Draw and label the following rivers in blue: Roanoke, Cape Fear, Catawba, and Neuse.
- Label Albemarle Sound and Pamlico Sound.
- Label Cape Hatteras, Cape Lookout, and Cape Fear.
- Shade and label the Great Smoky Mountain National Park in green.
- Shade and label any state park of interest in purple.
- Label Virginia, Tennessee, Georgia, South Carolina, and Atlantic Ocean.
- Label the following cities, using all CAPS for the capital city: Raleigh, Kitty Hawk, Charlotte, and Asheville.

### Virginia

- Shade and label the Appalachian and Blue Ridge Mountains.
- Place a brown triangle at Mount Rogers and label its name and elevation.
- Label the Chesapeake Bay and the Delmarva Peninsula.
- Draw and label the following rivers in blue: Rappahannock, York, Potomac, Roanoke, James, and Shenandoah.
- Shade and label Shenandoah National Park in green.
- Shade and label any state park of interest in purple.
- Label Maryland, West Virginia, Kentucky, Tennessee, North Carolina, and Atlantic Ocean.
- Label the following cities, using all CAPS for the capital city: Richmond, Virginia Beach, Arlington, Lynchburg, Norfolk, Chesapeake, and Williamsburg.

**Geography Terms**  
piedmont  
plateau



Uncle Josh's Outline Map of

# North Carolina

100 miles

0  
© 1999, 2000 Geography Matters  
800-426-4650

# GEOGRAPHICAL REGIONS

## • Coastal Plains •

---

---

---

---

---

---


---

---


---

---

---



## • Piedmont •



---

---

---

---

---

---

---

---

---

---

---

## • Mountains •

---

---

---

---

---

---


---

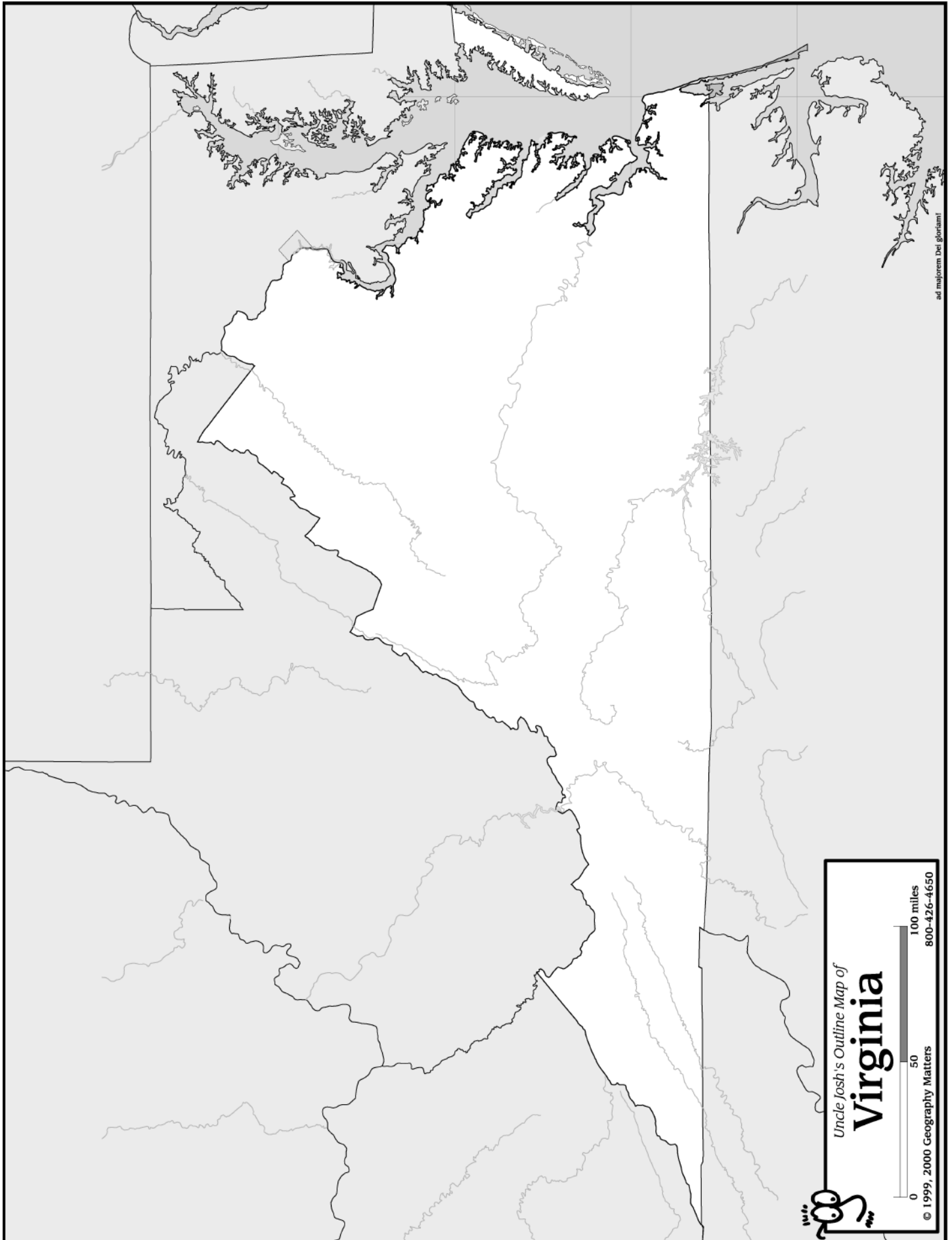
---

---

---

---





ad maiorem Dei gloriam



Uncle Josh's Outline Map of

**Virginia**

0 50 100 miles

© 1999, 2000 Geography Matters 800-426-4650

# ARLINGTON NATIONAL CEMETERY

---

---

---

---

---

---

---


---

---

---

---

---



• Eight U.S. Presidents from Virginia •

1. \_\_\_\_\_
2. \_\_\_\_\_
3. \_\_\_\_\_
4. \_\_\_\_\_
5. \_\_\_\_\_
6. \_\_\_\_\_
7. \_\_\_\_\_
8. \_\_\_\_\_