



# GEOGRAPHY TRAILS

## Week 8 - South America


### Day 1

-  The world's highest waterfall is located in a remote Venezuelan forest. What is its name and how far does it drop? \_\_\_\_\_
- What type of climate covers most of the northern half of the continent? \_\_\_\_\_


### Day 2

-  What river delta is near the islands of Trinidad and Tobago? \_\_\_\_\_
- What mountain chain is the longest in the world? \_\_\_\_\_

### Day 3

-  Where is the Patagonia region? \_\_\_\_\_
- The highest point, lowest point, hottest place, and coldest place in South America are all in what country? Name these places. \_\_\_\_\_
- \_\_\_\_\_
- \_\_\_\_\_

### Day 4

-  What southeast city of Brazil is located near 23°N 43°W? \_\_\_\_\_
- What desert in Chile has experienced over 500 years without rain and is the driest place on earth? \_\_\_\_\_

## MAPPING

### South America

- Label the Andes Mountain range (shade with light brown).
- Label each country. Use all CAPS.
- Put a circle with a dot on each capital city and label with the city name. Remember to use the same color you have already used to label capital cities.
- Label the Galapagos Islands, Falkland Islands.
- Shade French Guiana. It is not officially a country but a territory of France.

## GEOGRAPHY TERMS

- archipelago
- delta
- savanna(h)
- harbor





# SOUTH AMERICA

## • Earthquakes •

---

---

---

---

---

---

---

---

---

---

---

---

# SOUTH AMERICA

In the News

---

---

---

---

People

---

---

---

---

Other

---

---

---

---



# COUNTRY FACTS - SOUTH AMERICA

Country	Area	GNP per capita	Infant Mortality Rate	Population Density	Government
Brazil					
Argentina					
Chile					
Columbia					

# GEOGRAPHY TRAILS

## Week 9 - South America

### Day 1



What city (in Tierra del Fuego province in Argentina) is the southernmost city in the world?

\_\_\_\_\_

What is its latitude? \_\_\_\_\_

### Day 2



What is the name of the cape at the southern tip of South America? \_\_\_\_\_

What is a small strip of water that reaches from a sea or lake into the shore land? \_\_\_\_\_

### Day 3



Through what seven countries do the Andes Mountains pass? \_\_\_\_\_

\_\_\_\_\_

\_\_\_\_\_

Briefly describe the climate in Bogota, Colombia. \_\_\_\_\_

\_\_\_\_\_

### Day 4



What country is the world's leading exporter of bananas? \_\_\_\_\_

What two South American countries have no coastline? \_\_\_\_\_

\_\_\_\_\_

## MAPPING

Add to the South America map.

- Draw and label the Amazon, Negro, Orinoco, Parana, and Uruguay rivers.
- Mark the Tropic of Capricorn at  $23.5^{\circ}$  S with a dot-dash line and label it with blue.
- Label Cape Horn, Lake Titicaca, and Caracas, Venezuela.



# SOUTH AMERICA

---

---



---

---

---

---

---



---

---

---

---

---

---

---

## • Amazon Rain Forest •

---

---

---

---

---

---

---

