

GEOGRAPHY TRAILS

Week 8 - South America

Day 1

- YY What is the largest country in South America? _____
- What does a star or dot inside a circle usually represent on a map? _____

Day 2

- YY Two countries in South America produce more coffee than any other countries in the world. Name them. _____
- Which borders Central America? _____

Day 3

- YY Are the Andes Mountains on the eastern or western part of South America? _____
- What two countries have borders along the Andes Mountain range? _____
- _____

Day 4

- YY What two South American countries have no coastline? _____
- _____
- The Incas left stone ruins called Machu Picchu in the mountains of what country? _____

MAPPING

South America

- Label the Andes Mountain range (shade with light brown).
- Label each country. Use all CAPS.
- Label the Galapagos Islands, Falkland Islands.

GEOGRAPHY TERMS

- archipelago
- savanna(h)








SOUTH AMERICA

What I learned about South America



SOUTH AMERICAN WILDLIFE





GEOGRAPHY TRAILS

Week 9 - South America

Day 1

YY The Amazon River carries more volume of water than any river in the world. Where is it located?

What line of latitude is located at the mouth of the Amazon? _____

Day 2

YY What is the capital of Chile? _____

Is the Caribbean Sea located north or south of South America? _____

Day 3

YY What kind of climate/terrain describes the northern half of Brazil? _____

Is the majority of South America above or below the equator? _____

Day 4

YY In what country is the Amazon rain forest? _____

What is the capital of Venezuela? _____

MAPPING

Add to the South America map

- Draw and label the Amazon, Negro, Orinoco, Parana, and Uruguay rivers.
- Label Cape Horn, Lake Titicaca, and Caracas, Venezuela.



SOUTH AMERICA

Fascinating facts about the Amazon River _____



What I have learned about the Amazon River _____

