








EXERCISE 1

1. Write the answers.





$$2 + 2 + 2 =$$

$$3 \text{ twos} =$$






$$3 + 3 + 3 + 3 =$$

$$4 \text{ threes} =$$



$$6 + 6 =$$

$$2 \text{ sixes} =$$



$$4 + 4 + 4 =$$

$$3 \text{ fours} =$$